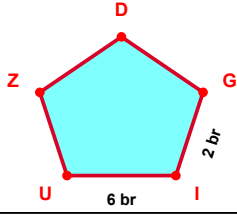
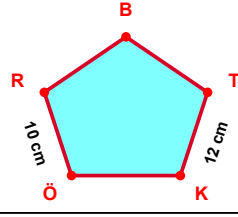


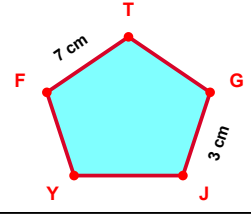
SORU: Aşağıdaki şekillerde verilen, kenar uzunlukları farklarını bulunuz.



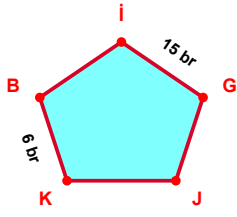
$$|UI| - |IG| = \dots\dots\dots$$



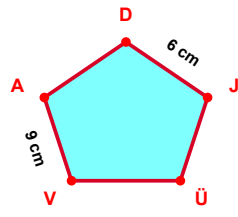
$$|KT| - |RÖ| = \dots\dots\dots$$



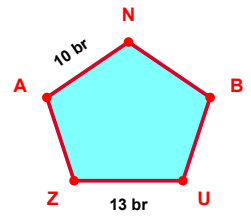
$$|TF| - |JG| = \dots\dots\dots$$



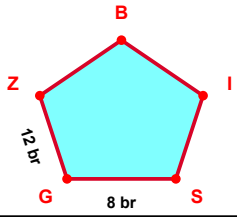
$$|İG| - |BK| = \dots\dots\dots$$



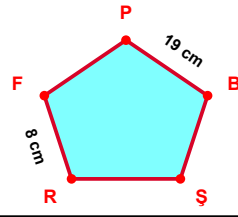
$$|AV| - |JD| = \dots\dots\dots$$



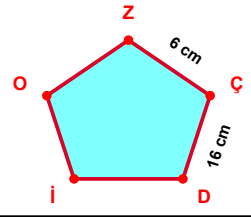
$$|ZU| - |NA| = \dots\dots\dots$$



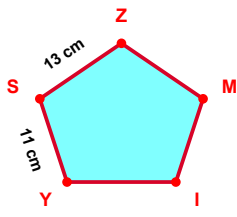
$$|ZG| - |GS| = \dots\dots\dots$$



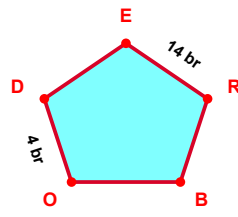
$$|BP| - |FR| = \dots\dots\dots$$



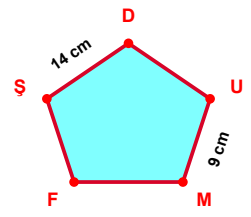
$$|DÇ| - |ÇZ| = \dots\dots\dots$$



$$|ZS| - |SY| = \dots\dots\dots$$

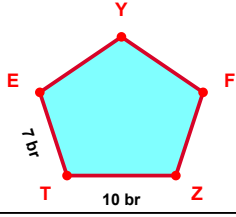


$$|RE| - |DO| = \dots\dots\dots$$

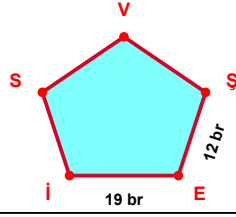


$$|DS| - |MU| = \dots\dots\dots$$

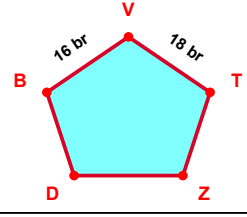
SORU: Aşağıdaki şekillerde verilen, kenar uzunlukları farklarını bulunuz.



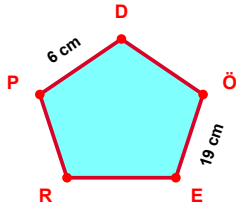
$$|TZ| - |ET| = \dots\dots$$



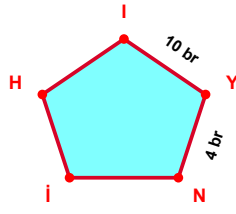
$$|İE| - |ES| = \dots\dots$$



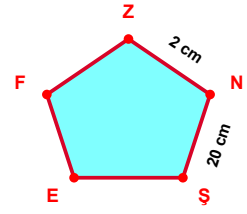
$$|TV| - |VB| = \dots\dots$$



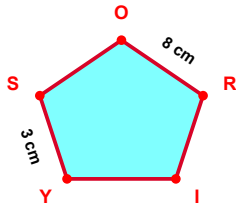
$$|EÖ| - |DP| = \dots\dots$$



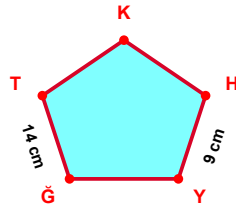
$$|Yİ| - |NY| = \dots\dots$$



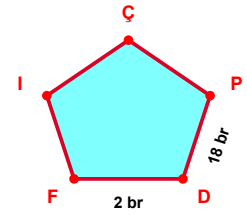
$$|ŞN| - |NZ| = \dots\dots$$



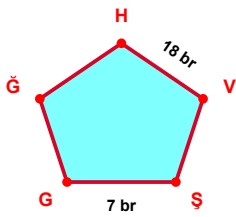
$$|RO| - |SY| = \dots\dots$$



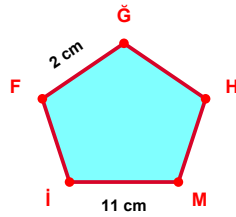
$$|TĞ| - |YH| = \dots\dots$$



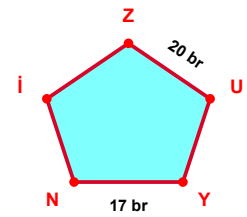
$$|DP| - |FD| = \dots\dots$$



$$|VH| - |GS| = \dots\dots$$



$$|İM| - |ĞF| = \dots\dots$$



$$|UZ| - |NY| = \dots\dots$$

SÜREÇ ODAKLI DEĞERLENDİRME ÖLÇEĞİ

Doğru Sayısı: / 24

Öğretmen ilgili kutucuğu işaretler.

Geliştirilmeli (0-8)

İyi (9-14)

Çok İyi (15-20)

Mükemmel (21-24)

☐
☐
☐
☐

Hazırlayan:

Bu bölüme sınıfınızın ilgili kazanıma yönelik genel durumuna ilişkin gözlem ve izlenimlerinizi, öğrencilerinizin bu kazanımla ilgili öğrenme eksikliklerini ve bu eksikliklerin giderilmesi amacıyla yaptığınız/yapmayı planladığınız faaliyetleri not edebilirsiniz.

No	Adı - Soyadı	Toplam Puan	Değerlendirme
1			
2			
3			
4			
5			
6			
7			
8			
9			
10			
11			
12			
13			
14			
15			
16			
17			
18			
19			
20			
21			
22			
23			
24			
25			
26			
27			
28			
29			
30			
31			
32			
33			
34			
35			

Hazırlayan: